

HOLIDAY HOMEWORK ASSIGNMENT (2023-24)

CLASS- III

**Oh Summer Oh Summer!!
You bring life into the heart,
Summer vacations are here to
start.
No worries, no tension,
Fun and Frolic not to mention;
Playing and freaking out,
No rules, no school with friends
just laughs and shouts!!!**



Dear Students,

Here are your most awaited moments, your Summer Vacation Fun and gusto!!! Wow we have planned some activities... Do the activities and make your time a quality time. You will learn a lot doing these activities.

INSTRUCTIONS

1. All the work should be done neatly.
2. Charts should be bright and colourful with bold headings and borders around.
3. While doing activities collect pictures from old books, magazines, newspapers or internet.
4. Due importance should be given to Holiday Homework as well as activities as they will be graded.

DATE OF SUBMISSION OF HOLIDAY HOMEWORK:

DATE

DAY

SUBJECT

04/7/23

TUESDAY

ENGLISH

06/7/23

THURSDAY

HINDI

08/7/23

SATURDAY

MATHEMATICS

10/7/23

MONDAY

EVS

The school will remain closed from **15/5/23 (Monday)** to **30/6/23 (Friday)** and will reopen on **01/7/23 (Saturday)**.

ENGLISH

1. Read lots of books, magazines, newspapers and watch only educational programmes on television.
2. Do one-page cursive writing neatly for ten days regularly on a separate notebook.
3. Make a colourful chart with related pictures on the following topics according to your Roll No's:



ROLL NO

TOPIC

- | | |
|------------|-------------------------------|
| 1 To 10 | Collective Nouns |
| 11 To 20 | Homophones |
| 21 To 30 | Antonyms / Synonyms |
| 31 onwards | Poem based on Nature / Family |
4. Make an attractive and creative **“Word Dictionary”** of your own. Include 4 new words of all the alphabets. Design it with lots of creativity and innovation.
 5. Do pg. 20, 34, 54, 60, 64-65 in your English Workbook.

(Do the following work in your MCB notebook.)

6. Read any one book from the following list and write the statements under the headings given below: -



1. The Enid Blyton Book of Brownies
 2. The Enid Blyton Book of Bunnies
- a) Title
 - b) Characters
 - c) The character you liked / disliked the most and why
 - d) Moral of the story
 - e) Make a list of fifteen words you have come across while reading the book. Use these words in your own sentences.
7. Write a paragraph in about 80 words on the following topics:
'A school of my dreams'.
 8. Read L-3 & L-4 Learn and Write ten difficult words from each chapter.

WORKSHEET

Name _____ Sec _____ Roll No. _____

Q1. Read the passage and answer the following questions:

Yamini, a twelve-year-old girl, loved going to school. One day, as she took out a pen from the pencil box to do her homework, it started doing the homework by itself! At first, she was scared but later she started enjoying it. It so happened that whatever she touched started doing its work by itself! Slowly she realized that she had developed a magical touch. The next day when she went to school, it was her turn to write the timetable on the board. The moment she picked up the chalk, it started scribbling on the board! Her teacher scolded her for having scribbled on the board. She tried explaining to the teacher but the teacher would not listen, Yamini was upset. Answer the following questions:

a) Give the story a suitable heading of your own

b) Why was Yamini upset?

c) Fill in the Blanks:

i. Yamini was _____ years old.

ii. Yamini has develop a _____ touch.

d) Find words in the passage which mean the same as the following:

Frightened - _____

Q2. Fill in the blanks with the correct articles.

a) White House is _____ residence of _____ President of America.

b) I will be visiting _____ old age home tomorrow with my parents.

What _____ lovely way to spend _____ day!

c) There is _____ new restaurant opens near my house. It has _____ appealing ambience.

Q3 Fill in the blanks with the correct forms of the verbs given in the brackets.

1. I _____ the answer to that question. (know)

2. The Indian team _____ the match. (lose)

3. The birds _____ over the tree. (fly)

4. Father _____ a new bicycle for me. (buy)


5. She _____ us about the new book that she had read. (tell)

6. Monali and her mother _____ the stray dogs in their neighbourhood. (feed)

7. Raman _____ the ball but hurt his leg. (catch)

Q4. Observe the pictures and construct a sentence about them in the present continuous tense.

a.



b.



c.



d.



Q5. Watch the Panchtantra moral stories from the link given below-

https://www.youtube.com/watch?v=Uw6EDTR9i_k

कक्षा - तृतीय

विषय - हिन्दी

अभ्यास कार्य 2023-24

नोट :

1. कार्य करते समय स्वच्छता का ध्यान रखें ।
2. कार्य समय पर पूर्ण करे ।
3. रचनात्मक कार्य करते समय चित्रों का विशेष ध्यान रखें।

प्रश्न 1 अनुच्छेद को ध्यानपूर्वक पढ़िए और प्रश्नों के उत्तर दीजिए -



संजना एक अच्छी लड़की थी । वह अपनी हर सहेली के जन्मदिन पर एक पौधा उपहार में दिया करती थी । उसे मिट्टी की उपजाऊ शक्ति का भी पता था । उसे साफ़-सफ़ाई बहुत पसंद थी । उसने अपनी सहेलियों को भी बताया , “हमें लापरवाही से कूड़ा इधर-उधर नहीं फेंकना चाहिए । प्लास्टिक की थैलियों का प्रयोग नहीं करना चाहिए । हमें पेड़-पौधे लगाने चाहिए । कूड़ेदान को ढककर रखना चाहिए ।” उसकी

बात सुनकर सभी सहेलियाँ साफ़-सफ़ाई में अपना सहयोग देने के लिए प्रेरित हो गई

1. संजना अपनी सहेलियों को उपहार में क्या देती थी ?

उत्तर _____

2. हमें इधर-उधर क्या नहीं फेंकना चाहिए ?

उत्तर _____

3. हमें किसका प्रयोग नहीं करना चाहिए ?

उत्तर _____

4. हमें क्या ढककर रखना चाहिए ?

उत्तर _____

प्रश्न 2 चित्र को ध्यानपूर्वक देखो और निम्नलिखित प्रश्नों के उत्तर दो ।



(क) पेड़ कितने हैं ?

उत्तर _____

(ख) पेड़ पर कितने पक्षी बैठे हैं ?

उत्तर _____

(ग) तितलियाँ कैसी हैं ?

उत्तर _____

प्रश्न 3 दिए गए वाक्यों में रंगीन शब्दों के स्थान पर उनके पर्यायवाची शब्द लिखकर वाक्य दोबारा लिखो ।

(क) कानन बहुत घना था।

.....

(ख) मेरा गृह बहुत सुंदर है।

.....

(ग) सिंह दहाड़ रहा है।

.....

(घ) सरोवर में जलज खिले हैं।

.....

(ङ) मेरी जननी बहुत अच्छी हैं।


.....

(च) मघ गरज रहे हैं।

.....



प्रश्न 4 चित्र और शब्द जोड़कर नया शब्द बनाओ ।



+

ग्रहण

—

.....

डाक

+



—

.....



+

मंडल

—

.....

वर्ण

+



—

.....



+

मुखी

—

.....

चिड़िया

+




—


.....

प्रश्न 5 हम जो कह रहे हैं उसका ठीक उल्टा करो ।

चाँद में काला रंग भरो। कौए में सफ़ेद रंग भरो। पेड़ के ऊपर चूहे का चित्र बनाओ। पेड़ के नीचे चिड़िया का चित्र बनाओ। गरीब आदमी को मुकुट पहनाओ। झोपड़ी के अंदर जलते हुए दीये का चित्र बनाओ। पेड़ से पत्तियाँ ऊपर गिरती हुई दिखाओ।



प्रश्न 6 चित्रों की मदद से शब्द और उसका विलोम शब्द लिखिए ।



प्रश्न 7 नीचे एक कहानी को थोड़े शब्दों में समझाया है। शब्दों को पढ़कर कहानी को समझो और अपने शब्दों में लिखो। (कार्य कक्षा-कार्य कॉपी में करे)

(नेहा होशियार लड़की- घर में कोई नहीं- गाँव गए हैं- एक शाम कमरे में पढ़ रही- दूसरे कमरे में बत्ती देखी- दो-तीन लोग घर में- मुखौटा पहने थे- समझ गई चोर हैं- पुलिस को फ़ोन किया- पुलिस आई- चोरों को ले गई- इनाम मिला।)



रचनात्मक कार्य

अनुक्रमांक के अनुसार निम्नलिखित विषयों पर एक चार्ट का निर्माण (चित्र सहित) कीजिए

1. वचन (अनुक्रमांक 1 से अनुक्रमांक 10 तक)
2. कविता (अनुक्रमांक 11 से अनुक्रमांक 20 तक)
3. विलोम (अनुक्रमांक 21 से अनुक्रमांक 30 तक)
4. अपनी पसंदीदा कहानी चित्र सहित (अनुक्रमांक 31 से अंत तक)

MATHEMATICS

SESSION (2023-2024) CLASS III



- **Learning activity-** Learn multiplicative tables from 2 to 15.
- Practice Ch-1 Numbers upto 10,000 and Ch-2 Addition
- Do 2 to 6 pages in Maths Workbook.

TWIST YOUR BRAIN

1) SOLVE SUDOKO

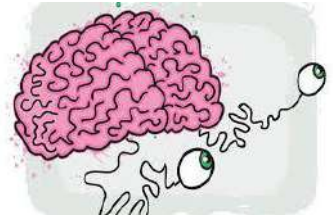
1		3		4	
	6		2		3
	4	6	3		1
3		2	4	6	
2		1		5	
	5		1		2

2) BRAIN TEASER

110, 809, 436, 999, 429, 545, 677, 500, 390, 981, 541, 234, 123, 632, 549, 899

Find the numbers from the grid given above:-

- (i) A number in which all the digits are same.
- (ii) A number that has 6 in the hundred's place.
- (iii) A number in which the digit in hundreds house and ones house is same.
- (iv) A number that comes between 109 and 111.



3) SHAPES AND PATTERN

Make a **robot** using mathematical shapes
(2D or 3D)



4) NUMBER OPERATIONS


- Choose any one week of the June month and make a **calendar** with Roman Numerals.

(hint: Choose dates as Roman numerals 1 to 7, 8 to 14, 15 to 21, 22 to 28)

- Record 2 activities on A4 sheet where you used any mathematical operations in daily life at market place. (Addition and subtraction)
- Create two pots for Odd and Even numbers on a coloured sheet.



5) FUN WITH CROSSWORDS



WORKSHEET



Q1) Circle the largest number

526	517	562	518
6782	6788	7899	35367
5184	78972	5677	4567
7644	3573	7889	345

Q2) Write the standard form of the following digits.

a) $900 + 30 + 2 =$ _____

b) $700 + 2 =$ _____

c) $100 + 20 + 3 =$ _____

Q3) Write the predecessors of the following ----

a) 2,140 - _____

b) 4,362 - _____

c) 4,159 - _____

d) 7,789 - _____

Q4) Write number in words :

a) 9087 _____

b) 8906 _____

c) 7508 _____

d) 4563 _____

Q5) Write the numerals:

a) Four thousand six hundred forty three _____


b) Nine thousand seven _____

c) Five thousand nine hundred nineteen _____


d) Two thousand eight hundred nine _____

Q7) Word problems

a) A school library has 3,730 books in French, 2,531 books in English, and 5,368 books in other languages. How many books are there in library?



b) A man plucked 375 apples from one tree, 504 apples from the second tree and 229 apples from the third tree. Find the total number of apples plucked from the trees.



Q8) Find the sum:

$$\begin{array}{r} \text{H T O} \\ 4 \ 8 \ 1 \\ + 2 \ 2 \ 3 \\ + 1 \ 3 \ 4 \\ \hline \end{array}$$

$$\begin{array}{r} \text{H T O} \\ 8 \ 5 \ 2 \\ + 1 \ 0 \ 3 \\ + 1 \ 0 \ 6 \\ \hline \end{array}$$

$$\begin{array}{r} \text{H T O} \\ 7 \ 5 \ 9 \\ + 1 \ 5 \ 2 \\ + 3 \ 0 \ 3 \\ \hline \end{array}$$

$$\begin{array}{r} \text{H T O} \\ 8 \ 4 \ 8 \\ + 4 \ 9 \ 3 \\ + 6 \ 3 \ 5 \\ \hline \end{array}$$

$$\begin{array}{r} \text{H T O} \\ 9 \ 6 \ 3 \\ + 7 \ 7 \ 4 \\ + 2 \ 0 \ 8 \\ \hline \end{array}$$

$$\begin{array}{r} \text{H T O} \\ 5 \ 5 \ 5 \\ + 4 \ 0 \ 8 \\ + 5 \ 4 \ 9 \\ \hline \end{array}$$

$$\begin{array}{r} \text{H T O} \\ 3 \ 2 \ 9 \\ + 2 \ 3 \ 5 \\ + 3 \ 8 \ 9 \\ \hline \end{array}$$

$$\begin{array}{r} \text{H T O} \\ 9 \ 2 \ 1 \\ + 8 \ 1 \ 2 \\ + 3 \ 3 \ 3 \\ \hline \end{array}$$

$$\begin{array}{r} \text{H T O} \\ 7 \ 2 \ 1 \\ + 2 \ 2 \ 3 \\ + 1 \ 2 \ 9 \\ \hline \end{array}$$

$$\begin{array}{r} \text{H T O} \\ 9 \ 9 \ 8 \\ + 2 \ 3 \ 3 \\ + 4 \ 3 \ 4 \\ \hline \end{array}$$


$$\begin{array}{r} \text{H T O} \\ 6 \ 2 \ 4 \\ + 9 \ 1 \ 3 \\ + 1 \ 1 \ 1 \\ \hline \end{array}$$

$$\begin{array}{r} \text{H T O} \\ 5 \ 3 \ 2 \\ + 4 \ 4 \ 4 \\ + 4 \ 0 \ 7 \\ \hline \end{array}$$

HAVE A GREAT SUMMERS!!!!!!

ENVIRONMENTAL STUDIES

- ✚ Read Ch- 9 Living and Non-living things. Write spell drill in the notebook.
- ✚ Make a beautiful chart according to your roll no-



ROLL NO. 1-13	➤ Special trees found across the world, also write their special features.
ROLL NO. 14-26	➤ Internal and external body organs
ROLL NO. 26-39	➤ Different landforms
ROLL NO. 40 Onwards	➤ Road safety rules

- ✚ Make a brochure of different Indian Cuisines.

PROJECT WORK- GROWING OF A SAPLING

- Germinate some green or black gram seeds.
- Fill a small empty container with some potting soil.
- Place the germinated seeds in the soil.
- Keep the container in sunlight and provide it with sufficient water.
Let your sapling grow.
- Decorate the sapling container using waste material.



WEAR YOUR THINKING CAP

➤ Write about how each person could conserve resources.

- a. Joe wants to play at his friend's house two streets away. He asks his mom to drive him there.



- b. Sonia is brushing her teeth. She turns the water on and leaves it running while she brushes.




- c. Levi is watching TV. He gets tired of watching and goes outside to play. He leaves the TV on.

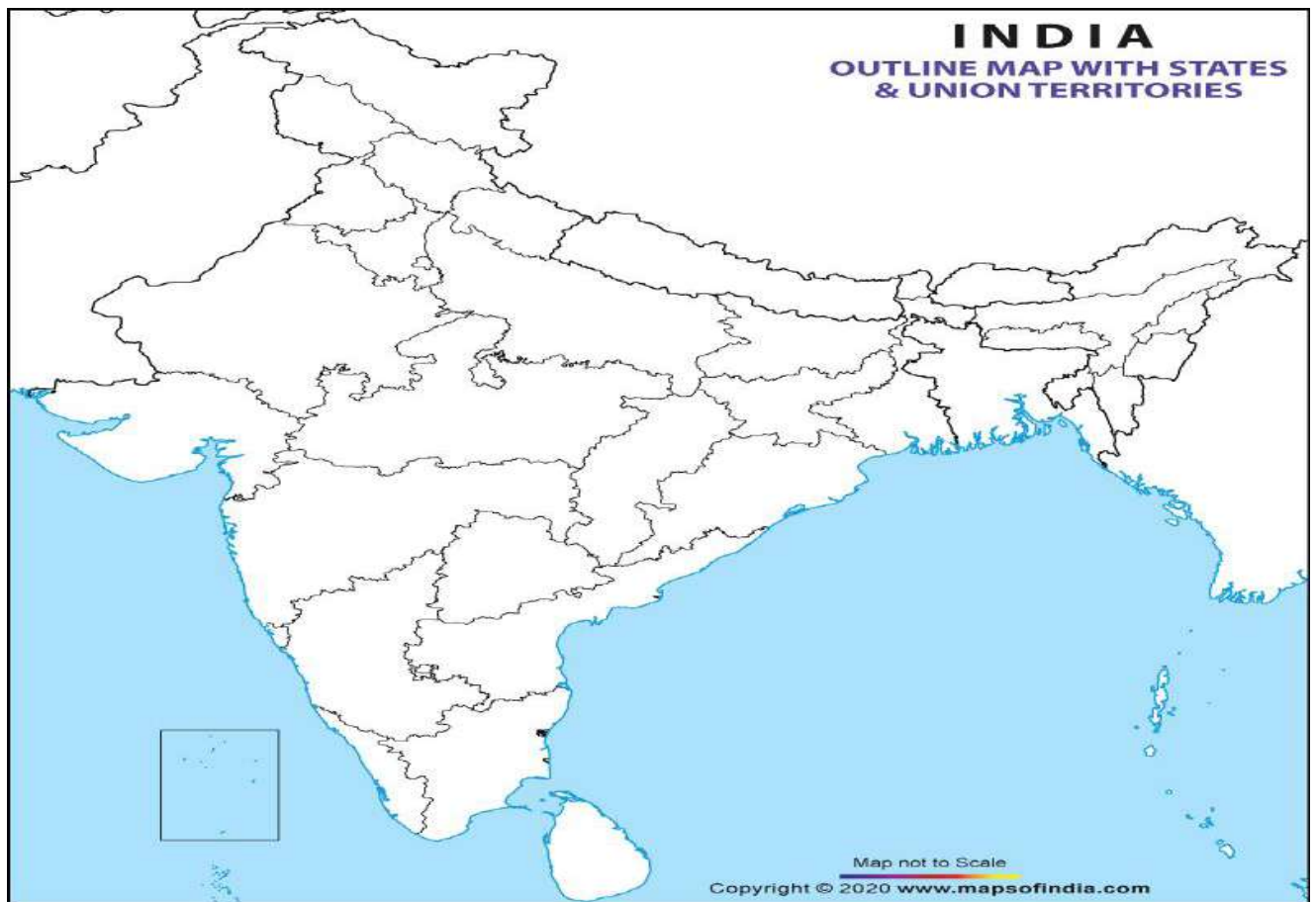


- d. Tom is going to hockey practice. He grabs a plastic bottle of water out of the fridge to take with him.



[illegible]

MAP SKILLS



Q. Answer the following questions. Also mark and colour the states in the given map of India.

a. It is the largest state in terms of area.

b. It is the most populous state.

c. This state has the largest coastline.


d. This state produces maximum silk.

e. This state produces maximum tea.


f. This state is known as Home of Bamboo.

g. This state is famous for Kathak folk dance.

h. This state is known as Fruit bowl of India.



➤ Solve the following puzzle-




ACROSS

- 1 The animals that live in jungle and forest
- 4 Animals that are very few in numbers and may soon no longer exist
- 9 The animals that are kept in farms or homes
- 10 I am the king of jungle. I live in a den
- 12 The animal that swallow their food
- 13 The tallest animal

DOWN

- 2 I guard your house. I live in a kennel
- 3 The biggest animal
- 5 I live in a hutch
- 6 Silk threads
- 7 A flightless bird which lived for many years and is now extinct
- 8 Candle
- 11 I chase mice away
- 12 The animals that live with us in our house

LET'S DO IT!



REDUCE



REUSE



RECYCLE

- To **reduce** means to use less. Write two ways you can use less.

- To **reuse** means to use things more than once. Write two ways you can reuse things.

- To **recycle** means to turn used things into new things. Write two things you can recycle.
