

HOLIDAY ASSIGNMENT (2026-2027)

CLASS – V

HURRAY! IT'S TIME FOR FUN AND PLAY! IT'S TIME FOR HOLIDAYS!!

Time for some holiday fun

Time for some play,

Summers are the time to chill,

And play a lot with clay.

Castles in the sand for sure,

Sunblock would be the only cure,

In the summer's heat,

Happy Summer Season!



❖ **Some Points to remember-**

- Drink plenty of water and juice to avoid dehydration.
- Go for morning walks in a park or garden with your family and friends.
- Respect your parents, grandparents and all elders.
- Make hand washing and hygiene a part of your routine..
- Contribute to save our precious environment. Minimize the wastage of resources like water, fuel and electricity.
- Eat healthy food and drink lots of water & juices.
- Do your homework neatly.
- Learn and revise all the work done in the class.

Date of submission of Holiday Homework:

<u>DATE</u>	<u>DAY</u>	<u>SUBJECT</u>
06/7/26	MONDAY	ENGLISH
07/7/26	TUESDAY	HINDI
08/7/26	WEDNESDAY	MATHEMATICS
09/7/26	THURSDAY	EVS

ENGLISH

1. Do one-page cursive writing neatly for twenty days in a separate notebook.




2. Make a beautiful and decorative card for your father on the occasion of Father's Day and write a few lines for him in it.

3. Project Work- Design an English Magazine on a colourful scrap book and include the following in it -

- a) An attractive cover page and name of your magazine.
- b) An interesting story of your choice with photographs.
- c) Trip to your favourite place with photographs.
- d) Newspaper clippings and articles about the environment.
- e) Self- made poster on "Save Animals"

(Do the following work in your English Notebook)

2. Read to discover a lot of new things. Here is a list of suggested reading or you can read any other book of your choice as available with you and answer the questions given below-



- Title of the story.
- Make a list of all the characters in the story.
- Draw the picture of your favourite character. Write few lines about him/her?
- Choose any five nouns and five adjectives from the story.

3. Write a paragraph in about 60- 70 words on the topic- 'Save Earth, Save Future.'

4. Draw a colorful chart on the following topics according to your Roll Number.

ROLL NO.

1-8

9-16

17-25

26-33

34 ONWARDS

TOPIC

NOUNS

ADJECTIVES

POEM (ANY TOPIC)

HOMOPHONES

MORAL STORY

❖ **Revise your P.T-1 Syllabus.**

PRACTICE WORKSHEET

CLASS : V

NAME _____ ROLL NO _____ SEC _____

Q1. Read the following story carefully and answer the questions given at the end.

In the days when an ice cream sundae cost much less, a 10-year-old boy entered a hotel coffee shop and sat at a table. A waitress put a glass of water in front of him.

He asked about the price of ice cream sundae. The waitress replied in a polite manner that it will cost him twenty rupees. The little boy pulled his hand out of his pocket and studied the coins in it.

Then, he inquired about the price of plain ice cream. By now, more people were waiting for a table and the waitress was getting impatient.

She answered bluntly that it costs fifteen rupees. The little boy counted his coins again and ordered for the plain ice cream.

The waitress brought the plain ice cream, put the bill on the table and walked away. The boy finished the ice cream, paid the cashier and left. When the waitress came back, she began to cry as she wiped the table. There, placed neatly beside the empty dish, were five rupees in coins. You see, he did not have the sundae because he wanted to have enough money to leave her a tip.

A) Choose and tick the correct answer-

1. "In the days" refers to-
 - i) just two-three days ago
 - ii) a long time ago
 - iii) a very recent time

2. The little boy studied the coins means-
 - i) he was learning counting
 - ii) he looked at them blankly
 - iii) he carefully calculated

B) Why was the waitress getting impatient?

C) Why didn't the boy have sundae?

Q2. Insert suitable articles:

- a) _____ painter had _____ black cat.
- b) Suraj opened _____ lock with _____ knife.
- c) _____ old man came to our shop and asked for _____ thermometer.
- d) _____ movie which I saw yesterday was _____ interesting one.
- e) _____ herd of elephants hid behind _____ cluster of trees.

Q3. Complete the given dialogues using suitable pronouns-

Student : May _____ go out for two minutes?

Teacher : Why do _____ want to go out?

Student : Madam, _____ mother has come. She has bought lunch for _____. _____ will take the lunch box from _____ and come back in two minutes.

Teacher : Okay. You may go.

Q4. There is an error in each line. Underline the incorrect word and write its correct word in your answer sheet-

	Incorrect	Correct
i. We peel the orange with a knife.	(a) _____	_____
ii. He is rich but there is no piece in his life.	(b) _____	_____
iii. I am wearing read t-shirt today.	(c) _____	_____
iv. I bought ate chocolates from the market.	(d) _____	_____
v. My mother buys milk from a big diary near my house.	(e) _____	_____

ग्रीष्मावकालीन गृहकार्य 2026 -27

कक्षा - पांचवीं

विषय - हिंदी

नोट -

- कार्य करते समय स्वच्छता का विशेष ध्यान रखें।
- समस्त लिखित कार्य अपनी कक्षा कार्य कॉपी में करें।

अभ्यास कार्य पत्रिका

प्रश्न 1 नीचे दिए गए अपठित गद्यांश को पढ़कर पूछे गए प्रश्नों के उत्तर दीजिए।

एक घने वन में एक बारहसिंगा रहता था। उसका सुनहरा बदन बहुत सुंदर था। उसके सींग भी बहुत सुंदर थे। मगर उसकी टाँगे पतली और बड़ी कुरूप थीं। उन्हें देखकर वह बहुत दुखी होता था। मगर उसे संतोष था कि उस जैसी देह और सींग वन में किसी भी जीव-जंतु के पास नहीं हैं। इस विचार ने उसे घमंडी बना दिया था। एक दिन वह नदी के किनारे जल पी रहा था। वह जल में अपना प्रतिबिंब देखकर फूला नहीं समा रहा था। तभी पक्षियों का कोलाहल सुनाई दिया। उसने देखा कि एक शिकारी धनुष-बाण लिए उसकी ओर बढ़ रहा है। यह देखकर वह सरपट भागा। कुछ ही दूरी पर घनी लताओं का एक कुंज था। उसमें उसके सींग अटक गए। उसने सींग निकालने की जितनी कोशिश की उतने ही वे और उलझते चले गए। शिकारी ने आकर बारहसिंगा को पकड़ लिया। बंदी होने पर बारहसिंगा सोचने लगा कि जिन कुरूप टाँगों को वह कोसा करता था, उन्होंने तो उसे बचाया और जिन सींगों पर उसे घमंड था, उन्होंने उसे फँसा दिया। कैसी विडंबना है?

(क) बारहसिंगा का बदन कैसा था?

- | | |
|-----------------|---------------|
| (i) सुनहरा () | (ii) काला () |
| (iii) सफ़ेद () | (iv) पीला () |

(ख) उसकी टाँगे कैसी थीं?

- | | |
|----------------|----------------|
| (i) सुन्दर () | (ii) कुरूप () |
|----------------|----------------|

(iii) मोटी () (iv) छोटी ()

(ग) बारहसिंगा को किस पर घमंड था?

(i) अपनी टाँगों पर () (ii) अपनी आँखों पर ()

(iii) अपने सींगों पर () (iv) अपने दाँतों पर ()

(घ) बारहसिंगा शिकारी की पकड़ में क्यों आ गया?

(ङ) जो शब्द विशेषण नहीं है, उसे चुनिए-

(i) सुनहरा बदन () (ii) पतली टाँगें ()

(iii) सींगों पर () (iv) घनी लताओं ()

प्रश्न 2 चांद में बैठे सर्वनाम शब्दों से रिक्त स्थानों की पूर्ति कीजिए।

(क) तो भूख लगी है, सुबह से नहीं खाया।

(ख) कल क्यों नहीं आई?

(ग) रीना बाहर आई और सबको चॉकलेट दी।


(घ) कुशल ने कमीज़ देखते हुए कहा- "ज़रा दिखाइए।"

(ङ) कुत्ते ने छलाँग लगाई और भागने लगा।


(च) लगता है, दही में गिर गया है।

(छ) कोई दवाई दे दो, पेट में दर्द है।

(ज) तुम खा रहे हो?



प्रश्न 3 एक घर में विशेषण और एक घर में विशेष्य बैठे हैं। आप दोनों घरों में से उपयुक्त शब्द छांटकर विशेषण और विशेष्य के जोड़े बनाइए।



- | | | | | | |
|----|-------------------|------------------|----|-------|-------|
| 1. | थोड़ी | चीनी | 2. | | |
| 3. | | | 4. | | |
| 5. | | | 6. | | |

प्रश्न 4 नीचे लिखे शब्दों में से व्यक्तिवाचक तथा जातिवाचक संज्ञा छांटकर लिखिए ।

हिमालय, पटना, कछुआ, विद्यार्थी, दिल्ली, कलम, साधु, बालक, सलमान खान, भारत

व्यक्तिवाचक संज्ञा	जातिवाचक संज्ञा
1.	1.
2.	2.
3.	3.
4.	4.
5.	5.

प्रश्न 5 दी गई वर्ग पहेली में से मुहावरे छांटकर लिखिए।

आँ ख ल ग ना क च पी चे
 खों म रं प क प ल ठ ह
 का टाँ ग अ डा ना ल दि रा
 ता न ज द न स ह खा खि
 रा य मा मुँ ह छि पा ना ल
 न आ ना अँ गू ठा दि खा ना

आँखों का तारा

प्रश्न 6 संयुक्त तथा द्वितीय व्यंजन वाले शब्दों को छांटकर उनकी जगह पर लिखिए।

मक्का, अन्न, अज्ञान, शिक्षा, पत्ता, पट्टियाँ, त्रिशूल, श्रमिक, कक्षा, कच्चा

संयुक्त व्यंजन

द्वितीय व्यंजन

लिखित कार्य

प्रश्न 7 विद्यालय में तैराकी प्रतियोगिता आयोजित करवाने हेतु प्रार्थना करते हुए प्रधानाचार्या जी को पत्र लिखिए।

प्रश्न 8 दिए गए चित्र को देखकर कहानी निर्माण कीजिए।



- प्रथम इकाई परीक्षा हेतु पाठ 1 'हम भारत के रखवाले हैं' तथा पाठ 2 'फ़र्क पड़ता है' के प्रश्न उत्तर याद कीजिए।

रचनात्मक कार्य

- अपने अनुक्रमांक अनुसार दिए गए विषय पर सुंदर चार्ट बनाइए।

अनुक्रमांक

विषय

1 - 20

स्वच्छ नदियां सुरक्षित कल

21 - 31

पाठ्यपुस्तक से अतिरिक्त दोहे

31 से आगे

विशेषण

HOLIDAY HOMEWORK

MATHS

CLASS-5

Project

Topic: The National Census (Do in A4 size Scrap File)

Data: Choose 5 Indian states and write their populations.

Answers the following questions:-

1. Write each number in Words (Indian & International systems).
2. Arrange populations in Ascending and Descending order.
3. Show the Place Value of each digit in a chart.
4. Write the Successor and Predecessor for each of population figure.
5. Reflection: Write a 3–4 line summary of what you learned from this data.
6. Round off each population to the nearest thousand.

(Working model)

1. 3D Shape City: Create a model city using nets of solids (cubes for houses, cylinders for towers, cones for roofs). (Roll no 1 to 15)
2. Create a sliding mechanism using cardboard and paper strips to show numbers up to the Crore period. (Roll no 16 to 30)
3. Roman Numeral Clock: Make a colorful working clock face using Roman Numerals (I to XII) (Roll no 31 to 35)
4. Create a Working 3D Place Value Machine for the International System (Roll no 35 onwards)

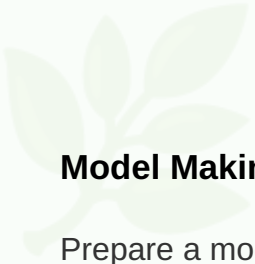
- Learn and Create a set of ' Flashcards' for tables 2 to 20.
- Revise Ch-1 and Ch -2 thoroughly for the PT-1.

Assignment

Note - Do assignment in separate small size note book.

1. Draw a chart for 9,40,51,826 and find the sum of the place value of the digit 4 and 9.
2. Write 12,50,07,403 in words in both Indian and International systems.
3. Arrange in Ascending Order: 5,06,210; 56,021; 5,60,210; 50,62,100.
4. Write the Successor of 9,99,999 and the Predecessor of 10,00,000.
5. A factory produced 2,45,670 pens in January and 3,12,450 in February. Find the total production.
6. Subtract the smallest 6-digit number from the largest 7-digit number.
7. If a monthly fee is ₹2,500, find the total fees for 15 months.
8. An explorer found a stone carved with the year MDCCCLVII. Which famous year in Indian history is this?
9. Round off 4,64,782 and 53,219 to the nearest thousand and find their estimated sum.
10. At a school fair, a stall sells 1,289 tickets on Saturday and 1,812 tickets on Sunday. Find the total tickets sold to the nearest hundred.
11. Write a 5-digit number that remains the same even when read backward (Palindrome).
12. If you swap the digits in the Tens and Ten-Lakh place of 7,45,12,309, what is the new number?
13. Find the sum of the place values of the digit 7 in these two numbers: 3,74,56,201 and 9,87,12,000.
14. You have the digit cards: 2,0,5,3,8. Create a 5-digit number closest to 30,000 and create the largest even number possible.
15. Fill in the missing digits to make the sum correct:

TC	C	TL	L	TTh	Th	H	T	O
3	0	4	?	6	0	0	0	0
+		9	8	0	0	8	6	?
3	?	2	5	6	8	8	6	0



SUMMER ASSIGNMENT (2026-27)

CLASS-V SUBJECT-EVS

Model Making

Prepare a model of any one internal organ (Heart, Brain, Lungs, Stomach, etc.).

- Use eco-friendly materials like clay, cardboard, or thermocol.
- Label all the parts clearly.
- Write 5-6 lines explaining its function.

Periodic Test -1 Preparation

Prepare the following chapters for Periodic Test - 1:

Ch-1: Internal Organs and Their Functions

Ch-2: Our Needs and Wants

Ch-3: Cultivation

Art Integrated Project

Topic: Games and Martial Arts

Prepare a scrapbook or chart project based on the following:

Any 5 Games and Martial Arts, such as Karate, Judo, Taekwondo, Cricket, Football.

Map Work

On a map of India, mark any 4 states in each cardinal direction along with their capitals.

Color the states in different colors. Also write one famous crop grown in each state.

Enhance your vocabulary

Read Ch-4 Maps and Globes from your textbook and prepare a list of fifteen words.

Situation-Based Questions

1. Why are internal organs important for our body?
2. What will happen if farmers stop cultivation?
3. How do maps help us in daily life?



Roll Number Wise Chart Topics

Roll No.	Topics
----------	--------

1 to 10	Indian Heritage (Historical monuments)
11 to 20	Natural Disaster
21 to 30	Balanced Diet
31 to 40	Food Chain/Food Web

PRACTICE WORKSHEET (2026-27)

CLASS-V EVS

Name: _____ Class: V Sec: _____

Q1. Fill in the blanks:

- a) The _____ pumps blood throughout the body.
- b) Food, water, and air are our basic _____.
- c) Farmers grow crops through the process called _____.
- d) A _____ shows the whole Earth.

Q2. Match the following:

1. Brain	a. Model of Earth
2. Globe	b. Necessary to live
3. Needs	c. Grows crops
4. Farmer	d. Controls body

Q3. Answer in short:

- a) Name any two internal organs and their functions.
- b) What is the difference between needs and wants?
- c) What is cultivation?
- d) What is a map?

Q4. Diagram Labeling

Draw and label any one internal organ (Heart/Brain/Lungs).

Instructions (as per document):

- Do all written work in neat handwriting
- Use colors and diagrams wherever possible
- Submit on time
- Maintain cleanliness and creativity

COMPUTER SKILLS
CLASS - V
HOLIDAY HOMEWORK



Do the uploaded worksheet.



Journey of Computers: From Past to present

- Use chart paper or A3 size sheet.
- Show the timeline of computer from past to present in a neat way.
- You can either draw or paste picture.
- Make the chart paper neat and colorful.



Be Smart Online: Do's and Don'ts of Internet Use

- Use A3 size sheet.
- Divide the Chart into 2 Sections
Left side → DO's
Right side → DON'Ts
- Draw and write neatly.
- Show your creativity.



WORKSHEET
COMPUTER SKILLS
CLASS – V

NAME - _____ SEC - _____ DATE - _____

Q1. Write the use of the following.

a) Find - _____

b) Replace - _____

c) Check Spelling - _____

d) Format Painter - _____

Q2. Fill in the blanks.

1. Maximum columns permitted for A4 paper in portrait orientation is _____ .

2. _____ tool in ms-word allows to copy and paste formatting from one part of document to another.

3. _____ is a short cut key for find and replace.

4. If the ruler is not displayed, the use _____ tab to turn on the ruler.

5. _____ is the blank space which is left from edges of page to text.



Q3. Answer the following questions.

1. Write the steps to insert columns in ms-word.

2. Write the steps to use format painter.

3. Ridhi is making a poster in ms-word but she wants to make it in landscape. Help her by suggesting the steps to change the orientation of the page.

Q4. Learn the following shortcut key.

Ctrl + Home: Go to the beginning of the document

Ctrl + End: Go to the end of the document

Ctrl + Up Arrow: Move to the beginning of the current line

Ctrl + Down Arrow: Move to the end of the current line

Ctrl + W: Close

Ctrl + Q: Quit application